

Exercise: 1

* Express each of the following complex number in polar form:-

* Q # 1:- $z = -\sqrt{3} + i$

$$r = |z| = \sqrt{(-\sqrt{3})^2 + (1)^2} = \sqrt{3+1} = 2$$

$$\therefore \cos \theta = \frac{x}{|z|} = \frac{-\sqrt{3}}{2}, \quad \sin \theta = \frac{y}{|z|} = \frac{1}{2}$$

$$\Rightarrow \theta = \text{Arg } z = \pi - \frac{\pi}{6} = \frac{5\pi}{6}$$

$$\therefore z = r (\cos \theta + i \sin \theta)$$

$$z = 2 \left(\cos \frac{5\pi}{6} + i \sin \frac{5\pi}{6} \right)$$

* Q # 2:- $z = -i$

$$z = 0 - i$$

$$r = |z| = \sqrt{(0)^2 + (-1)^2} = 1$$

$$\therefore \cos \theta = \frac{x}{|z|} = \frac{0}{1} = 0, \quad \sin \theta = \frac{y}{|z|} = \frac{-1}{1} = -1$$

$$\Rightarrow \theta = \text{Arg } z = -\pi/2$$

$$\text{Hence } z = 1 \left(\cos \left(-\frac{\pi}{2} \right) + i \sin \left(-\frac{\pi}{2} \right) \right)$$

* Q # 3:- $z = -1 - \sqrt{3}i$

$$r = |z| = \sqrt{(-1)^2 + (-\sqrt{3})^2} = \sqrt{1+3} = 2$$

$$\therefore \cos \theta = \frac{x}{|z|} = \frac{-1}{2}, \quad \sin \theta = \frac{y}{|z|} = \frac{-\sqrt{3}}{2}$$

$$\Rightarrow \theta = \text{Arg } z = \frac{\pi}{3} - \pi = -\frac{2\pi}{3}$$

Hence

$$z = 2 \left(\cos \left(-\frac{2\pi}{3} \right) + i \sin \left(-\frac{2\pi}{3} \right) \right)$$

* Q # 4:- $z = -1 + i$

$$r = |z| = \sqrt{(-1)^2 + (1)^2} = \sqrt{2}$$

$$\therefore \cos \theta = \frac{-1}{\sqrt{2}}, \quad \sin \theta = \frac{1}{\sqrt{2}}$$

$$\Rightarrow \theta = \text{Arg } z = \pi - \frac{\pi}{4} = \frac{3\pi}{4}$$

M. Fiaz Hussain
Applied and Analytic
Mathematics Research Center
(AAMRC)

* Q# 5:- $Z = (2+2i)(1-i)$

$$Z = -2 + 2i + 2i - 2i^2$$

$$= -2 + 4i - 2(-1) \quad \because i^2 = -1$$

$$= -2 + 4i + 2$$

$$= 0 + 4i$$

$$r = |Z| = \sqrt{0^2 + 4^2} = 4$$

$$\because \cos \theta = \frac{0}{4} = 0, \quad \sin \theta = \frac{4}{4} \Rightarrow \sin \theta = 1$$

$$\theta = \text{Arg } Z = \frac{\pi}{2}$$

Hence

$$Z = 4 \left(\cos \frac{\pi}{2} + i \sin \frac{\pi}{2} \right)$$

* Q# 6:- $Z = \frac{-34i}{5-3i}$

$$= \frac{-34i}{5-3i} \times \frac{5+3i}{5+3i} \Rightarrow \frac{(-34i)(5+3i)}{(5)^2 - (3)^2 i^2}$$

$$= \frac{-170i + 102}{25 + 9} \Rightarrow \frac{-170i + 102}{34}$$

$$Z = 3 - 5i$$

$$\therefore r = |Z| = \sqrt{(3)^2 + (-5)^2} = \sqrt{9+25} = \sqrt{34}$$

$$\theta = \text{Arg } Z = \tan^{-1} \frac{y}{x}$$

$$= \tan^{-1} \left(\frac{-5}{3} \right)$$

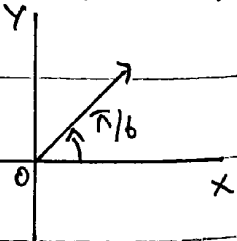
Hence

$$Z = \sqrt{34} \left(\cos \left(\tan^{-1} \frac{-5}{3} \right) + i \sin \left(\tan^{-1} \frac{-5}{3} \right) \right)$$

* Express the given complex numbers in Cartesian form and plot argand diagram:-

* Q# 7:- $Z = 2 \text{cis} \left(\frac{\pi}{6} \right)$

$$= 2 \left(\cos \frac{\pi}{6} + i \sin \frac{\pi}{6} \right)$$



$$= 2 \left(\frac{\sqrt{3}}{2} + i \frac{1}{2} \right)$$

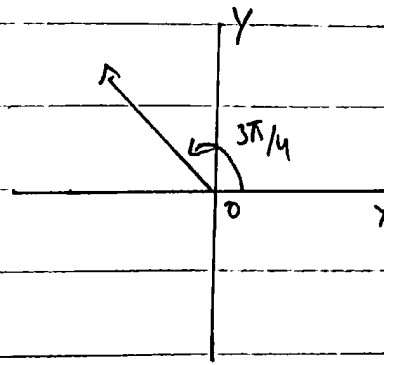
$$z = \sqrt{3} + i$$

Q # 8:- $z = 5 \text{CIS} \left(\frac{3\pi}{4} \right)$

$$= 5 \left(\cos \frac{3\pi}{4} + i \sin \frac{3\pi}{4} \right)$$

$$= 5 \left(-\frac{1}{\sqrt{2}} + i \frac{1}{\sqrt{2}} \right)$$

$$= -\frac{5}{\sqrt{2}} + i \frac{5}{\sqrt{2}}$$

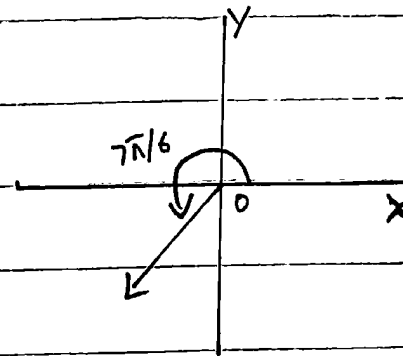


Q # 9:- $z = \sqrt{3} \text{CIS} \left(\frac{7\pi}{6} \right)$

$$= \sqrt{3} \left(\cos \frac{7\pi}{6} + i \sin \frac{7\pi}{6} \right)$$

$$= \sqrt{3} \left(-\frac{\sqrt{3}}{2} + i \left(-\frac{1}{2} \right) \right)$$

$$= -\frac{3}{2} - i \frac{\sqrt{3}}{2}$$



Q # 10:- $z = \frac{5 \text{CIS} \frac{\pi}{3}}{2 \text{CIS} \frac{\pi}{2}}$

$$= \frac{5 \left(\cos \frac{\pi}{3} + i \sin \frac{\pi}{3} \right)}{2 \left(\cos \frac{\pi}{2} + i \sin \frac{\pi}{2} \right)}$$

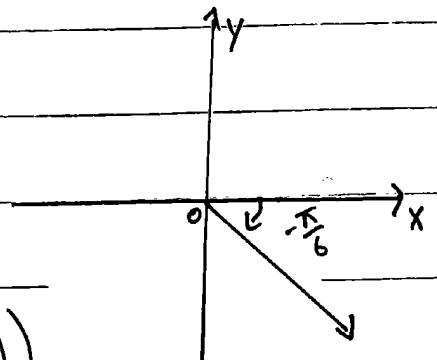
$$= \frac{5}{2} \left(\cos \left(\frac{\pi}{3} - \frac{\pi}{2} \right) + i \sin \left(\frac{\pi}{3} - \frac{\pi}{2} \right) \right)$$

$$= \frac{5}{2} \left(\cos \left(-\frac{\pi}{6} \right) + i \sin \left(-\frac{\pi}{6} \right) \right)$$

$$= \frac{5}{2} \left(\cos \left(-\frac{\pi}{6} \right) + i \sin \left(-\frac{\pi}{6} \right) \right)$$

$$= \frac{5}{2} \left(\frac{\sqrt{3}}{2} - i \frac{1}{2} \right)$$

$$= \frac{5\sqrt{3}}{4} - \frac{5}{4}i$$



Q # 11:- Find the $|z|$.

$$z = -2i(1+i)(2+4i)(3+i)$$

$$= |-2i| |1+i| |2+4i| |3+i|$$

$$= \sqrt{4} \sqrt{2} \sqrt{20} \sqrt{10}$$

$$= \sqrt{1600}$$

$$|z| = 40$$

$$\text{ii) } z = \frac{(3+4i)(-1+2i)}{(-1-i)(3-i)}$$

$$|z| = \frac{|(3+4i)(-1+2i)|}{|(-1-i)(3-i)|} \Rightarrow \frac{|3+4i| |-1+2i|}{|-1-i| |3-i|}$$

$$= \frac{\sqrt{3^2+4^2} \sqrt{-1^2+2^2}}{\sqrt{(-1)^2+(-1)^2} \sqrt{3^2+(-1)^2}} = \frac{\sqrt{9+16} \sqrt{1+4}}{\sqrt{1+1} \sqrt{9+1}} = \frac{\sqrt{25} \sqrt{5}}{\sqrt{2} \sqrt{10}}$$

$$= \frac{5\sqrt{5}}{\sqrt{20}} \Rightarrow \frac{5\sqrt{5}}{2\sqrt{5}} \Rightarrow \frac{5}{2}$$

★ Q # 12:- Show that z is real if and only if $z = \bar{z}$

Suppose $z = \bar{z} \quad \therefore z = a+ib$

$$a+ib = a-ib$$

$$ib+ib=0$$

$$2ib=0 \quad \therefore 2 \neq 0, i \neq 0$$

$$b=0$$

$\therefore z = a+i0 = a$, z is real.

Conversely Suppose z is real

$$z = a$$

$$= a+i0 \quad \text{and} \quad \bar{z} = a-i0$$

Thus $z = \bar{z}$

★ Q # 13:- Show that $|z_1 - z_2| \leq |z_1| + |z_2|$

Draw the clear diagram showing

$$|z_1 - z_2| = |z_1| + |z_2|$$

Let z_1 and z_2 be represented by

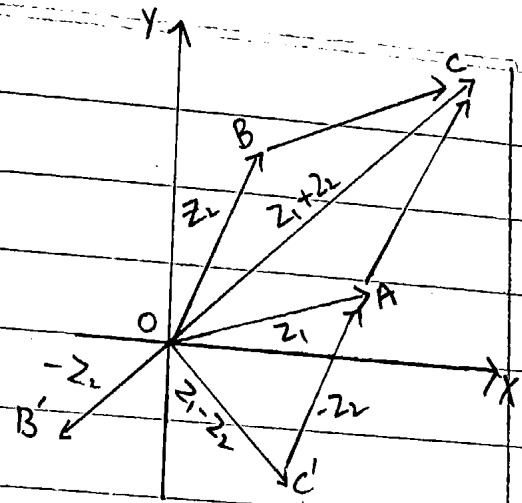
$$\vec{OA} = z_1, \quad \vec{OB} = z_2$$

and $z_1 + z_2 = \vec{OC}$

Now $|z_1| = OA$

$$|z_2| = OB = AC$$

$$\Rightarrow |z_1 + z_2| = OC$$



Also $\vec{OB}' = -z_2 = \vec{AC}'$, $\vec{OC}' = z_1 - z_2$

thus $OB' = |-z_2| = |z_2| = AC$ $OC' = |z_1 - z_2|$

By Triangle OAC'

$$OC' < OA + AC'$$

$$\Rightarrow |z_1 - z_2| < |z_1| + |z_2| \quad \text{--- (I)}$$

If OA and OB are parallel then parallelogram $OACB$ becomes straight line.

$$OC = OA + AC$$

i.e. $|z_1 + z_2| = |z_1| + |z_2|$

replace z_2 by $-z_2$

$$\therefore |z_1 - z_2| = |z_1| + |-z_2|$$

$$|z_1 - z_2| = |z_1| + |z_2| \quad \text{--- (II)}$$

By (I) and (II)

$$|z_1 - z_2| \leq |z_1| + |z_2|$$

- Prove analytically:-

$$|z_1| - |z_2| \leq |z_1 + z_2| \leq |z_1| + |z_2|$$

Since $|z|^2 = z\bar{z}$

$$\therefore |z_1 + z_2|^2 = (z_1 + z_2)(\overline{z_1 + z_2})$$

$$= (z_1 + z_2)(\bar{z}_1 + \bar{z}_2)$$

$$= z_1\bar{z}_1 + z_1\bar{z}_2 + z_2\bar{z}_1 + z_2\bar{z}_2$$

M. Fiaz Hussain
Applied and Analytic
Mathematics Research Center
(AAMRC)

$$= |z_1|^2 + |z_2|^2 + 2(\operatorname{Re} z_1 \bar{z}_2)$$

$$\Rightarrow |z_1 + z_2|^2 \leq |z_1|^2 + |z_2|^2 + 2|z_1 \bar{z}_2| \quad \because |z_1| \geq \operatorname{Re} z_1$$

$$|z_1 + z_2|^2 \leq |z_1|^2 + |z_2|^2 + 2|z_1||\bar{z}_2|$$

$$|z_1 + z_2|^2 \leq |z_1|^2 + |z_2|^2 + 2|z_1||z_2| \quad \because |\bar{z}_2| = |z_2|$$

$$|z_1 + z_2|^2 \leq (|z_1| + |z_2|)^2$$

$$|z_1 + z_2| \leq |z_1| + |z_2| \quad \text{--- (I)}$$

Since

$$|z_1| = |(z_1 + z_2) - z_2|$$

$$|z_1| \leq |z_1 + z_2| + |-z_2|$$

$$|z_1| \leq |z_1 + z_2| + |z_2| \quad \because |-z_2| = |z_2|$$

$$|z_1 - z_2| \leq |z_1 + z_2| \quad \text{--- (II)}$$

By (I) and (II)

$$|z_1| - |z_2| \leq |z_1 + z_2| \leq |z_1| + |z_2|$$

* Q # 14: - Let $z_1 = 24 + 7i$ and $|z_2| = 6$, Find the greatest and least value of $|z_1 + z_2|$.

$$z_1 = 24 + 7i$$

$$|z_1| = \sqrt{(24)^2 + (7)^2} = \sqrt{625} = 25$$

Also $|z_2| = 6$

Greatest value of $|z_1 + z_2| = |z_1| + |z_2|$

$$= 25 + 6 = 31$$

Least value of $|z_1 + z_2| = ||z_1| - |z_2||$

$$= |25 - 6| = 19$$

* Q # 15: - If z_1, z_2 are complex no. Show that

$$|z_1 + z_2|^2 + |z_1 - z_2|^2 = 2(|z_1|^2 + |z_2|^2)$$

$$\text{L.H.S} = |z_1 + z_2|^2 + |z_1 - z_2|^2$$

$$= (z_1 + z_2)(\overline{z_1 + z_2}) + (z_1 - z_2)(\overline{z_1 - z_2}) \quad \because |z|^2 = z\bar{z}$$

$$= (z_1 + z_2)(\bar{z}_1 + \bar{z}_2) + (z_1 - z_2)(\bar{z}_1 - \bar{z}_2)$$

$$= z_1\bar{z}_1 + \cancel{z_1\bar{z}_2} + \cancel{z_2\bar{z}_1} + z_2\bar{z}_2 + z_1\bar{z}_1 - \cancel{z_1\bar{z}_2} - \cancel{z_2\bar{z}_1} + z_2\bar{z}_2$$

$$= |z_1|^2 + |z_2|^2 + |z_1|^2 + |z_2|^2$$

$$= 2|z_1|^2 + 2|z_2|^2$$

$$= 2(|z_1|^2 + |z_2|^2) \Rightarrow \text{R.H.S}$$

* Q # 16:- Prove that $\left| \frac{az+b}{b\bar{z}+a} \right| = 1$ for $|z|=1$

$$\text{L.H.S } \left| \frac{az+b}{b\bar{z}+a} \right| = \left| \frac{az+b}{a\bar{z}+a} \right|$$

$$= \frac{|az+b|}{|b\bar{z}+a|} \Rightarrow \frac{|z||az+b|}{|z||b\bar{z}+a|} \quad \therefore \text{Cancel by } |z|$$

$$= \frac{|z||az+b|}{|bz\bar{z}+az|} \Rightarrow \frac{|z||az+b|}{|b+a|} \quad \therefore z\bar{z}=|z|^2=1$$

$$= |z| \quad \therefore |z|=1$$

$$= 1 \quad \text{R.H.S}$$

* Q # 17:- Find the locus of points in plane satisfy each of given.

i- $|z-5|=6$

$$|x+iy-5|=6 \quad \therefore z=x+iy$$

$$|(x-5)+iy|=6$$

$$\sqrt{(x-5)^2 + y^2} = 6 \quad \text{Taking square on both sides.}$$

$$(x-5)^2 + y^2 = 36$$

Which is Circle.

$$\text{ii- } |z - 2i| \geq 1$$

$$|x + iy - 2i| \geq 1 \quad \therefore \text{Let } z = x + iy$$

$$|x + i(y - 2)| \geq 1$$

$$\sqrt{x^2 + (y - 2)^2} \geq 1 \quad \text{Taking square on both sides.}$$

$$x^2 + (y - 2)^2 \geq 1$$

Locus is set of points on and outside circle.

$$\text{iii- } \operatorname{Re}(z + 2) = -1$$

$$\operatorname{Re}(x + iy + 2) = -1 \quad \therefore z = x + iy$$

$$\operatorname{Re}(x + 2 + iy) = -1$$

$$x + 2 = -1 \quad \text{consider only Real part.}$$

$$x = -3$$

Which is line parallel to Y-axis.

$$\text{iv- } \operatorname{Re}(iz) = 3$$

$$\operatorname{Re}(i(x + iy)) = 3 \quad \therefore z = x + iy$$

$$\operatorname{Re}(xi + i^2y) = 3$$

$$\operatorname{Re}(ix - y) = 3 \quad \therefore i^2 = -1$$

$$-y = 3 \quad \text{consider Real part only.}$$

$$y = -3$$

Locus is a line parallel to X-axis.

$$\text{v- } |z + i| = |z - i|$$

$$|x + iy + i| = |x + iy - i| \quad \therefore z = x + iy$$

$$|x + i(y + 1)| = |x + i(y - 1)|$$

$$\sqrt{x^2 + (y + 1)^2} = \sqrt{x^2 + (y - 1)^2}$$

$$x^2 + (y + 1)^2 = x^2 + (y - 1)^2$$

Taking square on both.

$$x^2 + y^2 + x + 2y = x^2 + y^2 + x - 2y$$

$$2y = -2y$$

$$4y = 0$$

$$y = 0$$

Locus is X-axis.

$$\text{vi- } |z+3| + |z+1| = 4$$

$$|x+iy+3| + |x+iy+1| = 4$$

$$|(x+3)+iy| + |(x+1)+iy| = 4$$

$$\sqrt{(x+3)^2 + y^2} + \sqrt{(x+1)^2 + y^2} = 4$$

$$\sqrt{(x+3)^2 + y^2} = 4 - \sqrt{(x+1)^2 + y^2} \quad \text{Taking square on both sides.}$$

$$\left(\sqrt{(x+3)^2 + y^2}\right)^2 = \left(4 - \sqrt{(x+1)^2 + y^2}\right)^2$$

$$(x+3)^2 + y^2 = 16 + (x+1)^2 + y^2 - 8\sqrt{(x+1)^2 + y^2}$$

$$x^2 + 9 + 6x + y^2 = 16 + x^2 + 1 + 2x + y^2 - 8\sqrt{(x+1)^2 + y^2}$$

$$4x - 8 = -8\sqrt{(x+1)^2 + y^2}$$

$$4(x-2) = -8\sqrt{(x+1)^2 + y^2}$$

$$x-2 = -\frac{8}{4}\sqrt{(x+1)^2 + y^2}$$

$$x-2 = -2\sqrt{(x+1)^2 + y^2} \quad \text{Again square.}$$

$$x^2 + 4 - 4x = 4(x+1)^2 + y^2$$

$$x^2 + 4 - 4x = 4x^2 + 4 + 8x + 4y^2$$

$$3x^2 + 4y^2 + 12x = 0$$

$$\{(x, y) \mid 3x^2 + 4y^2 + 12x = 0\}$$

$$\text{ii- } -1 \leq \operatorname{Re} z < 1 \quad \therefore z = x+iy$$

$$\therefore -1 \leq x < 1 \quad \operatorname{Re} z = x$$

Locus is interval $[-1, 1[$

M. Fiaz Hussain
Applied and Analytic
Mathematics Research Center
(AAMRC)

viii- $\text{Im } z < 0$

$$\text{Im}(x+iy) < 0 \quad \therefore z = x+iy$$

$$y < 0$$

$$\text{Im } z = y$$

Locus is -ve y-axis.

ix- $\text{Arg } z = \pi/3$

$$\text{Arg}(x+iy) = \pi/3 \quad \therefore z = x+iy$$

$$\tan^{-1} \frac{y}{x} = \pi/3$$

$$\frac{y}{x} = \tan \frac{\pi}{3}$$

$$\frac{y}{x} = \sqrt{3}$$

$$y = \sqrt{3}x$$

$$\therefore \{(x, y) \mid y = \sqrt{3}x\}$$

x- $\text{Arg}(z-1) = -\frac{3\pi}{4}$

$$\text{Arg}(x+iy-1) = -\frac{3\pi}{4} \quad \therefore z = x+iy$$

$$\text{Arg}((x-1)+iy) = -\frac{3\pi}{4}$$

$$\tan^{-1} \frac{y}{x-1} = -\frac{3\pi}{4}$$

$$\frac{y}{x-1} = \tan -\frac{3\pi}{4}$$

$$= -1$$

$$y = -x+1$$

$x+y=1$ Locus is Line.

$$\text{i.e. } \{(x, y) \mid x+y=1\}$$